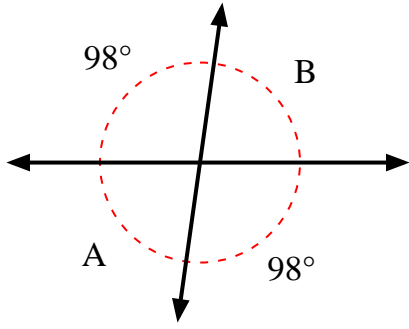


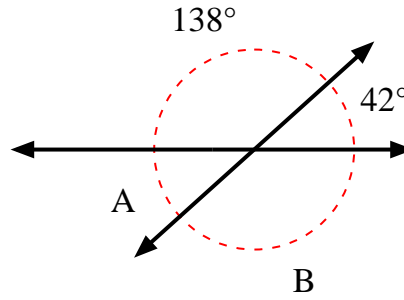


Find the value of angle 'A' and angle 'B'.

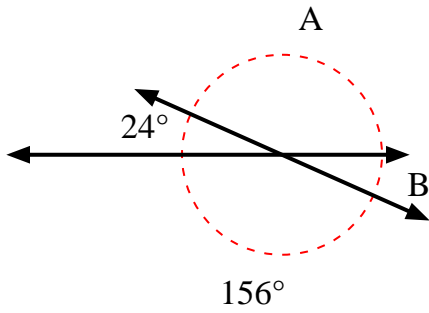
1)



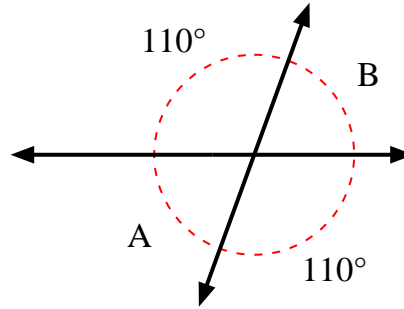
2)



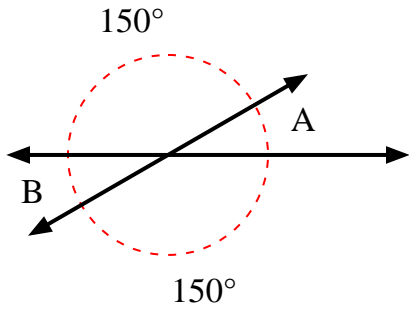
3)



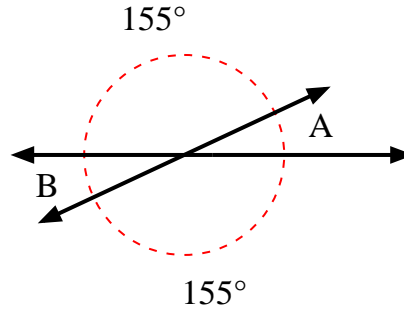
4)



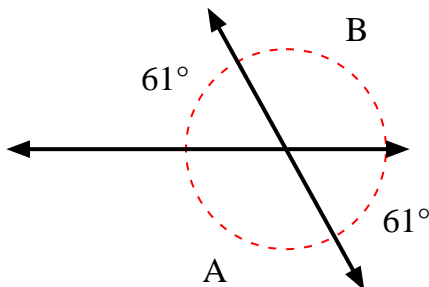
5)



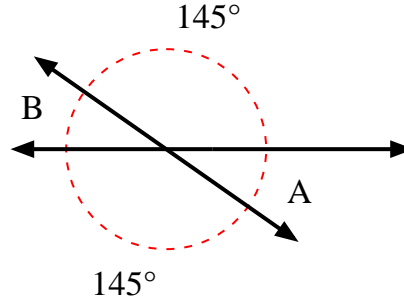
6)



7)



8)



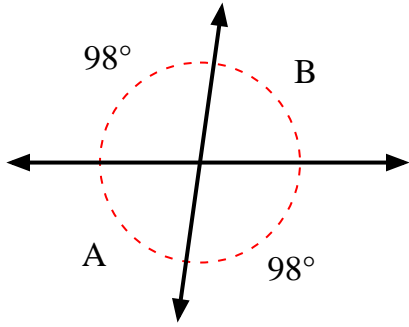
Answers

1. _____
2. _____
3. _____
4. _____
5. _____
6. _____
7. _____
8. _____

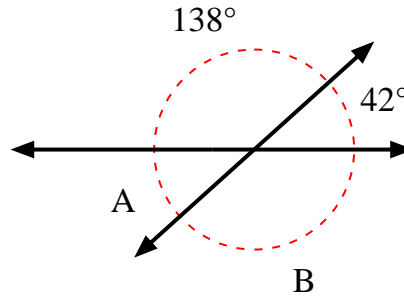


Find the value of angle 'A' and angle 'B'.

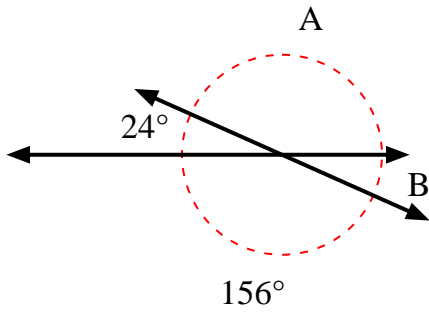
1)



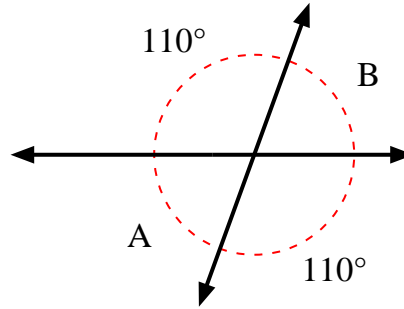
2)



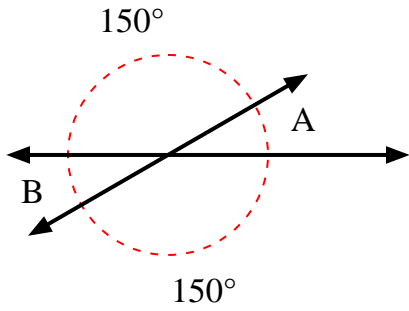
3)



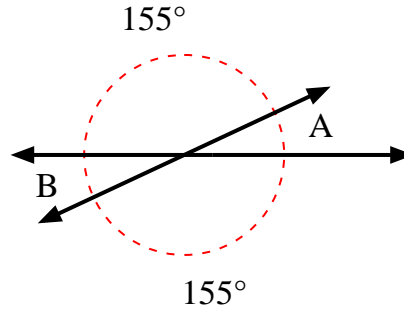
4)



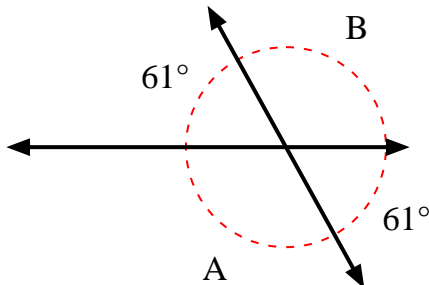
5)



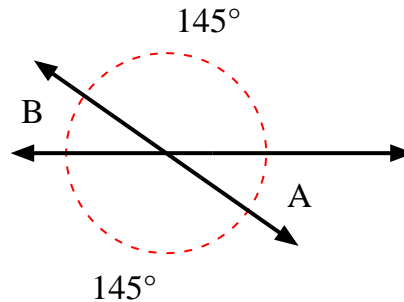
6)



7)



8)



Answers

1.	<u>82°</u>	<u>82°</u>
2.	<u>42°</u>	<u>138°</u>
3.	<u>156°</u>	<u>24°</u>
4.	<u>70°</u>	<u>70°</u>
5.	<u>30°</u>	<u>30°</u>
6.	<u>25°</u>	<u>25°</u>
7.	<u>119°</u>	<u>119°</u>
8.	<u>35°</u>	<u>35°</u>